



INDIAN SCHOOL AL WADI AL KABIR

DEPARTMENT OF MATHEMATICS (2021-2022)

TOPIC: SHAPES AND PATTERNS

WORKSHEET









RESOURCE PERSON: Ms. JYOTI SINGH



NAME: _____ CLASS: III SEC: _____ DATE: _____

I) Identify the shapes and fill in the boxes with the words given below.

Identify the shapes as-

sphere cone cube

			
<input type="text"/>	<input type="text"/>	<input type="text"/>	<input type="text"/>
			
<input type="text"/>	<input type="text"/>	<input type="text"/>	<input type="text"/>



II) What are the missing numbers?


8 10 12 18


14 12 10 6


20 17 16 15





III) Look at each pattern below. Which two shapes come next? Draw the shapes and complete the pattern.


1. 

2. 

3. 

4. 

5. 

6. 



IV) Observe the pictures given below. Put a (✓) if the dotted line is a Line of Symmetry.

